

# Unit 2, Station 3, Round 3, Task 2



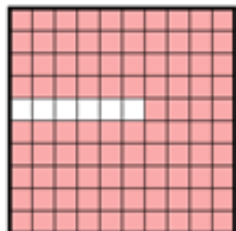
Fraction, Decimal

Name: **Answer Key**

Determine the value written as a fraction , decimal


Answer

Ex)




Fraction  $\frac{94}{100}$   
Decimal  $0.94$

1)




Fraction  $\frac{3}{10}$   
Decimal  $0.3$

2)



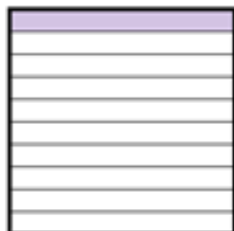
Fraction  $\frac{8}{10}$   
Decimal  $0.8$

3)




Fraction  $\frac{21}{100}$   
Decimal  $0.21$

4)




Fraction  $\frac{1}{10}$   
Decimal  $0.1$

5)



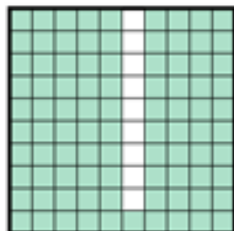
Fraction  $\frac{4}{10}$   
Decimal  $0.4$

6)



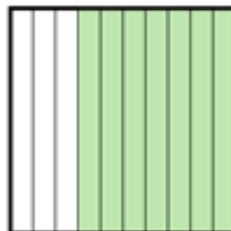
Fraction  $\frac{6}{10}$   
Decimal  $0.6$

7)




Fraction  $\frac{91}{100}$   
Decimal  $0.91$

8)




Fraction  $\frac{7}{10}$   
Decimal  $0.7$

9)



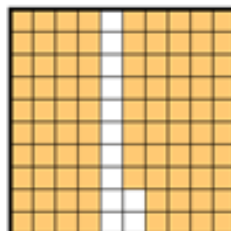
Fraction  $\frac{79}{100}$   
Decimal  $0.79$

10)



Fraction  $\frac{82}{100}$   
Decimal  $0.82$

11)



Fraction  $\frac{88}{100}$   
Decimal  $0.88$